
GEOGRAPHY

9696/32

Paper 3 Advanced Human Options


October/November 2015

INSERT

1 hour 30 minutes

READ THESE INSTRUCTIONS FIRST

This Insert contains all the Figures referred to in the questions.



This document consists of **5** printed pages and **3** blank pages.

Fig. 1 for Question 2

Two stages in production and location of manufacturing industry in cities

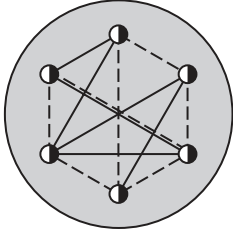


Fig. 1A

Stage 1

**Concentration
near the city centre**

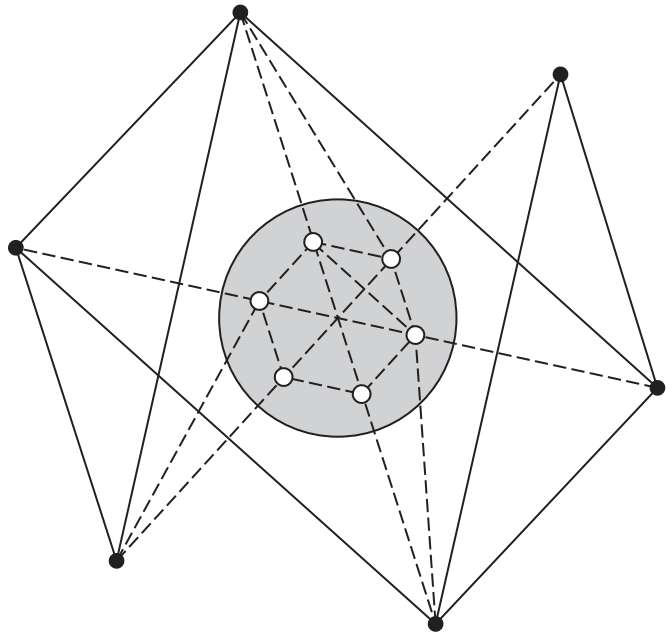


Fig. 1B

Stage 2

Decentralisation

Key

- production and control (headquarters, offices)
- production
- control (headquarters, offices)
- flow of information
- flow of materials, components and/or products
- central city area

Fig. 2 for Question 4

Loss of forested area, by country, 1990–2000



The mapping technique used above shows a country's land area in proportion to the amount of loss of forested area there. The inset map below shows a conventional world map for comparison. World regions are shown in different ranges of colour and countries within these ranges.

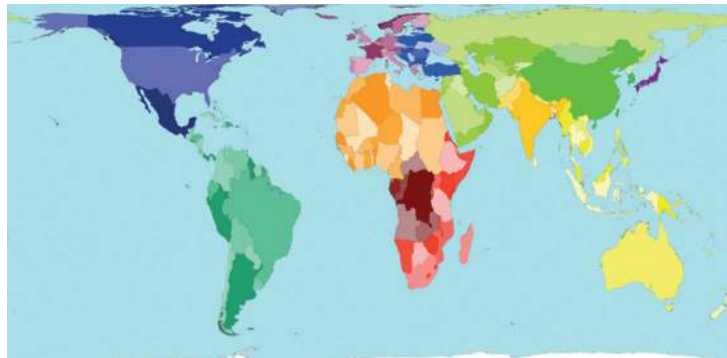
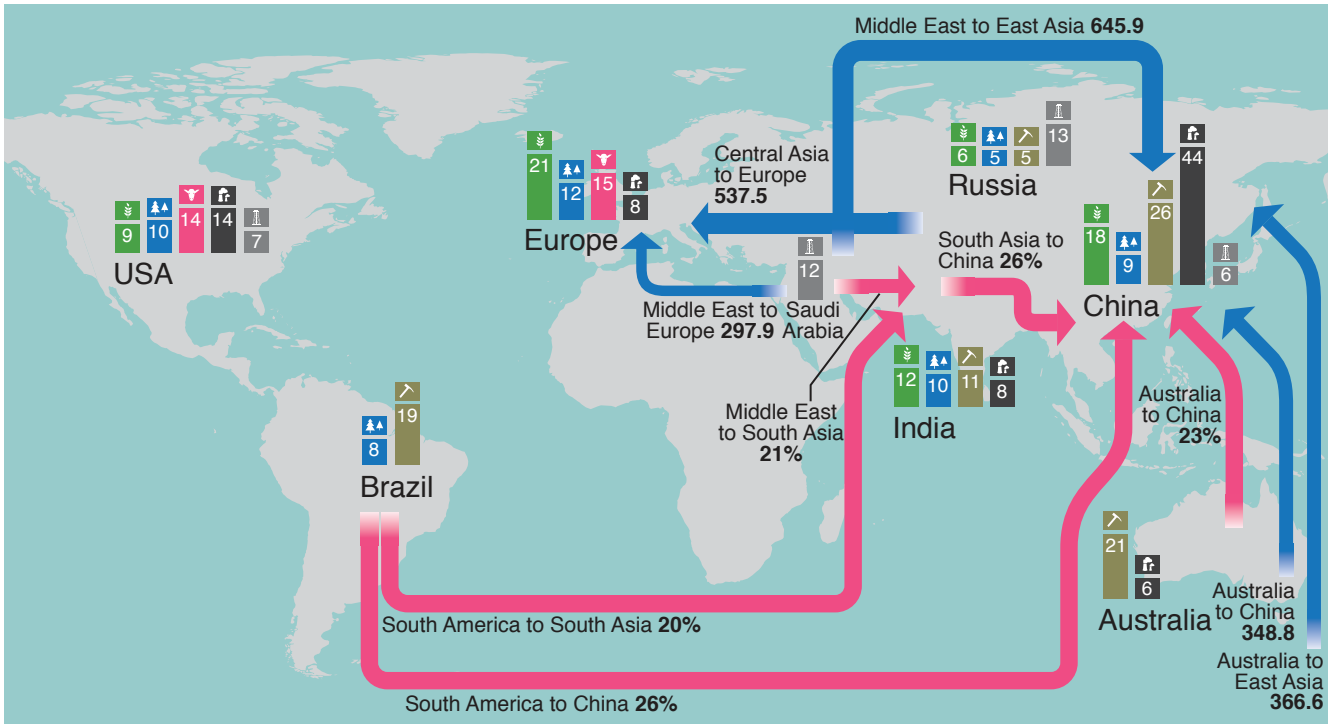


Fig. 3 for Question 5

Largest trade flows in 2010, fastest growing trade flows 2000–10 and output of selected commodities



Key


- Blue arrow: largest trade flows by weight, 2010 (million tonnes)
- Pink arrow: fastest growing trade flows 2000-10 (percentage annual growth)

commodity producers

(percentage of world output)

- Wheat icon: wheat
- Timber icon: timber
- Meat icon: meat
- Iron ore icon: iron ore
- Coal icon: coal
- Oil icon: oil

Fig. 4 for Question 7



BLANK PAGE

Permission to reproduce items where third-party owned material protected by copyright is included has been sought and cleared where possible. Every reasonable effort has been made by the publisher (UCLES) to trace copyright holders, but if any items requiring clearance have unwittingly been included, the publisher will be pleased to make amends at the earliest possible opportunity.

To avoid the issue of disclosure of answer-related information to candidates, all copyright acknowledgements are reproduced online in the Cambridge International Examinations Copyright Acknowledgements Booklet. This is produced for each series of examinations and is freely available to download at www.cie.org.uk after the live examination series.

Cambridge International Examinations is part of the Cambridge Assessment Group. Cambridge Assessment is the brand name of University of Cambridge Local Examinations Syndicate (UCLES), which is itself a department of the University of Cambridge.